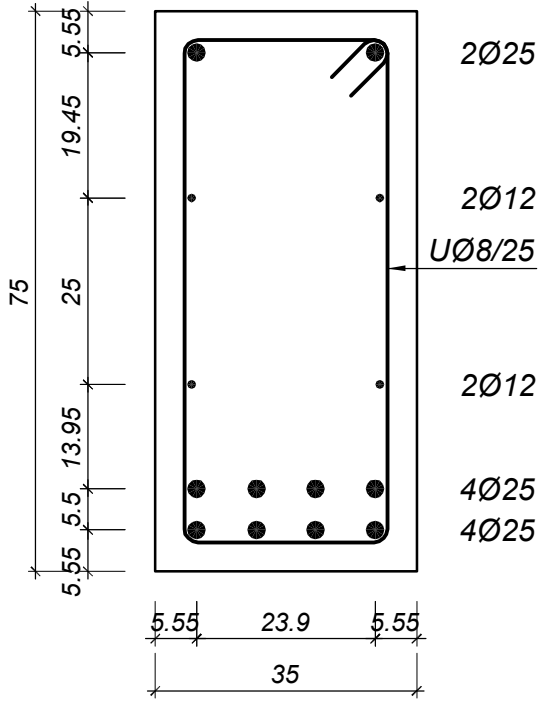


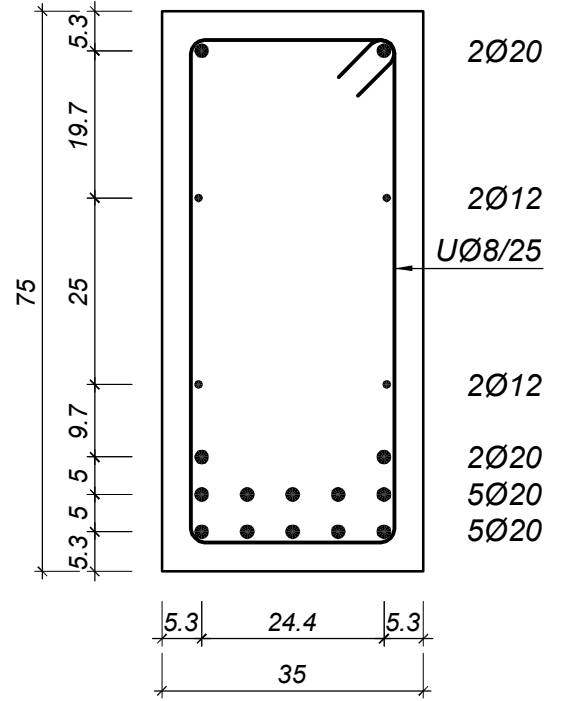
$$A_{a1} = 39.28 \text{ cm}^2$$

$$a_1 = 8.30 \text{ cm}$$



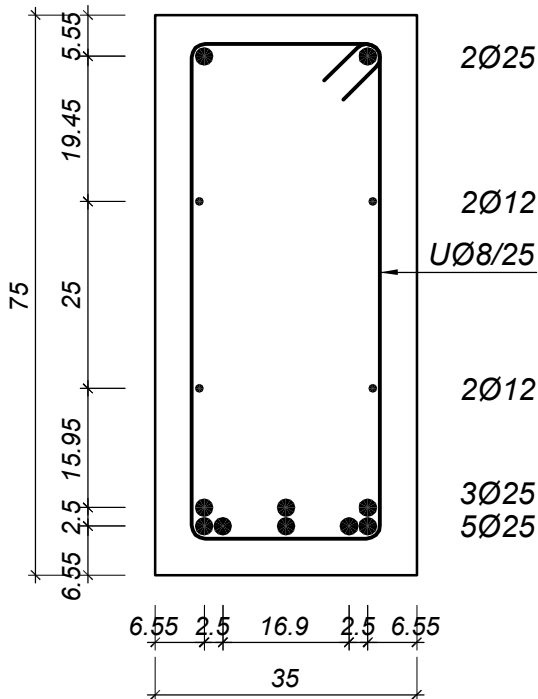
$$A_{a1} = 37.68 \text{ cm}^2$$

$$a_1 = 9.05 \text{ cm}$$



$$A_{a1} = 39.28 \text{ cm}^2$$

$$a_1 = 7.49 \text{ cm}$$



$$A_{a1} = 39.28 \text{ cm}^2$$

$$a_1 = 10.36 \text{ cm}$$

